



RAILWAY RECRUITMENT BOARDS
रेलवे भर्ती बोर्ड

RRB NTPC 6th April 2016 Shift 1

Roll No:	
Participants Name:	
Test Center Name:	iON Digital Zone iDZ, Attingal
Test Date:	06/04/2016
Test Time:	9:00 AM - 10:30 AM
Subject:	RRB NTPC Graduate

- 1. Options shown in green color with a tick icon are correct
- 2. Chosen option on top right of the question indicates the option selected by the candidate

Q.1 Rearrange the jumbled letters to make meaningful words and then select the one which is different.

- A. LOWELY
- B. IFER
- C. THIWE
- D. WRONB

Ans 1. B

2. C

Question ID : 2055231843

Status : Answered

Chosen Option : 2

 4. A

Q.2 Find the value of '?', if the mean of the data set 18, 16, 22, 13, ? = 16.

- A. 9
- B. 11
- C. 10
- D. 12

Ans  1. D

 2. B

 3. A

 4. C

Question ID : 2055231821

Status : Answered

Chosen Option : 3

Q.3 Which of the following will fit in '?' place in the following series?

AN, BO, CP, DQ, ?

- A. ES
- B. RE
- C. FS
- D. ER

Ans  1. B

 2. A

 3. C

 4. D

Question ID : 2055231828


Status : Answered

Chosen Option : 4

downloaded from www.wikiiscan.com

Q.4 The planet Mars is also known as the _____.

- A. Morning star
- B. Evening star
- C. Red planet
- D. Blue planet

Ans  1. D
 2. A
 3. C
 4. B

Question ID : 2055231789

Status : Answered

Chosen Option : 3

Q.5 What is the common name of the solution of calcium hydroxide?

- A. Lime water
- B. Diet soda
- C. Salt solution
- D. Vinegar





Ans  1. D
 2. B
 3. C
 4. A

Question ID : 2055231776

Status : Answered

Chosen Option : 2

- A. Student
- B. Board
- C. Class
- D. Lesson

Ans  1. A
 2. D
 3. B
 4. C





Question ID : 2055231831

Status : **Answered**

Chosen Option : 4

Q.7 'Smiling Buddha' was the code name for

- A. The rescue and relief operations after the cloudburst in Uttarakhand in 2013.
- B. The rescue and relief operations after an earthquake hit Nepal in 2015.
- C. Pokhran-II nuclear test conducted by India in 1998.
- D. Pokhran-I nuclear test conducted by India in 1974.

Ans  1. C
 2. D
 3. B
 4. A

Question ID : 2055231781

Status : **Answered**

Chosen Option : 4

Comprehension:

Consider the following information and answer questions based on it.

Six cars S, T, V, W, X and Y are parked in a parking lot, in a random order, from left to right, such that –

- A. T is parked on the extreme right.
- B. V is parked to the immediate right of Y and is one car away from W.
- C. X is to the immediate left of T and is three cars away from S.

SubQuestion No : 8

Q.8 Which of the following statement is true?

- A. There are two cars between T and V.
- B. There is one car between X and Y.
- C. There are three cars between Y and S.
- D. There is no car between X and W.

Ans  1. C

 2. A

 3. B

 4. D

Question ID : 2055231840

Status : Answered

Chosen Option : 2

Comprehension:

Consider the following information and answer questions based on it.

Six cars S, T, V, W, X and Y are parked in a parking lot, in a random order, from left to right, such that –

- A. T is parked on the extreme right.
- B. V is parked to the immediate right of Y and is one car away from W.
- C. X is to the immediate left of T and is three cars away from S.

SubQuestion No : 9

Q.9 W is to the immediate right of

- A. S
- B. Y
- C. V
- D. Cannot be determined

Ans  1. C

 2. B

 3. A

 4. D

Question ID : 2055231839

Status : Answered

Chosen Option : 2

Comprehension:

Consider the following information and answer questions based on it.

Six cars S, T, V, W, X and Y are parked in a parking lot, in a random order, from left to right, such that –

- A. T is parked on the extreme right.
- B. V is parked to the immediate right of Y and is one car away from W.
- C. X is to the immediate left of T and is three cars away from S.

SubQuestion No : 10

Q.10 Which car is parked to the immediate left of X?

- A. V
- B. Y
- C. W
- D. T

Ans  1. A

 2. D

 3. C

 4. B

Question ID : 2055231838

Status : Answered

Chosen Option : 2

Q.11 Jantar Mantar in Delhi is historically important for

- A. Public meetings
- B. Hunger strikes
- C. Ancient sculptures
- D. Astronomical observatory

Question ID : 2055231771

Status : Answered

Chosen Option : 4

 2. B

 3. A

 4. C

Q.12 'Bharat Stage Emission Standards' refers to

A. Vehicular pollution

B. Industrial pollution

C. Water pollution

D. Soil pollution

Ans  1. B

 2. A

 3. C

 4. D

Question ID : 2055231765

Status : Answered

Chosen Option : 1

Q.13 Statements followed by some conclusions are given below.

Statement:

1. $M > L > N$
2. $N = R$

Conclusions:

- I. $R > L$
- II. $R < M$

Find which of the given conclusions logically follows from the given statements.

- A. Only conclusion I follows.
- B. Only conclusion II follows.
- C. Both I and II follow.
- D. Neither I nor II follows.

Ans  1. A

 2. B

 3. D

 4. C

Question ID : 2055231841

Status : **Answered**

Chosen Option : 2

Q.14 Find the odd statement: Two lines are perpendicular to each other if they are,

- A. Adjacent sides of a rectangle.
- B. Diagonals of a rhombus.
- C. Hypotenuse and one side of a right-angle triangle.
- D. Adjacent sides of a square.

Ans  1. C

 2. B

 3. D

 4. A

Question ID : 2055231816

Status : **Answered**

Chosen Option : 1

A certain number of men agreed to do a work in 20 days. 5 men did not come for work. Others completed the work in 40 days. Find the number of men who had agreed to do the work originally.

- A. 8
- B. 10
- C. 12
- D. 15

Ans  1. C

 2. B

 3. D

 4. A

Question ID : 2055231803

Status : Answered

Chosen Option : 2

Q.16 How many prime numbers are there between the positive integers 60 and 100?

- A. 9
- B. 6
- C. 7
- D. 8

Ans  1. B

 2. A

 3. D

 4. C

Question ID : 2055231795

Status : Answered

Chosen Option : 4

Q.17 அறிக்கைகள் பின்தொடரும் சில முடிவுகளோடு கீழே தரப்பட்டுள்ளன:

அறிக்கை:

- I. நம்முடைய வாழ்க்கையில் இன்டர்நெட் ஒரு அவசியமான அம்சமாகி விட்டுள்ளது.
- II. இன்டர்நெட் ஒரு லாபமா அல்லது சாபமா என்பது இன்னமும் ஒரு முடியாத விவாதமாக இருந்து வருகிறது.

முடிவுகள்:

- I. இன்டர்நெட் இல்லாத வாழ்க்கையை கற்பனை கூட செய்து பார்க்க முடியாது.
- II. இன்டர்நெட் குறித்த முடிவே இல்லாத விவாதங்கள் தேவையில்லாதது.

கீழுள்ள முடிவுகளில் எது தரப்பட்டுள்ள அறிக்கைகளோடு தொடர்புடையதாக உள்ளது என கண்டறியவும்.

- A. முடிவு I மட்டுமே தொடர்புடையது.
- B. முடிவு II மட்டுமே தொடர்புடையது.
- C. I மற்றும் II மட்டும் தொடர்புடையன.

Question ID : 2055231842

Status : Answered

Chosen Option : 3

Ans  1. B

 2. C

 3. A

 4. D

Q.18 வாஷிங் சோடாவை _____-க்கு உபயோகிக்கலாம்.

- A. குடி தண்ணீரை கிருமி நீக்கம் செய்ய.
- B. சமையல் செய்வதற்கு.
- C. கடின நீரை மென்மையாக்குவதற்கு.
- D. விஷமல்லாத பொருளாக, வீட்டுப் பராமரிப்புப் பொருளில்.

Ans  1. C

 2. D

 3. B

 4. A

Question ID : 2055231791

Status : Answered

Chosen Option : 4

Q.19 Find the value of y ($y^4 - y^2 - y$) when $y = 5$.

- A. 2900
- B. 2975
- C. 2925
- D. 2995

Ans  1. C

 2. B

Question ID : 2055231813

Status : Answered

Chosen Option : 2

Q.20 The sum of two positive integers is 34 and their difference is 8. Find their product.

- A. 308
- B. 273
- C. 209
- D. 345

Ans  1. C

 2. A

 3. D

 4. B

Question ID : **2055231797**

Status : **Answered**

Chosen Option : **4**

Q.21 The LCM of two numbers is 66. The numbers are in the ratio 2:3. The sum of the numbers is

- A. 60
- B. 55
- C. 50
- D. 65

Ans  1. C

 2. D

 3. A

 4. B

Question ID : **2055231798**

Status : **Answered**

Chosen Option : **2**

Q.22 If P means ' \div ', R means ' \times ', Q means ' $+$ ' and S means ' $-$ ', then $36 \text{ P } 6 \text{ Q } 7 \text{ R } 8 \text{ S } 11 =$

- A. 45
- B. 51
- C. 52
- D. 62

Ans  1. D

Question ID : **2055231827**

Status : **Answered**

Chosen Option : **4**

 4. B

Q.23 Multitasking system specifically refers to

- A. More than one user.
- B. More than one process.
- C. More than one hardware.
- D. More than one IP address.

Ans  1. D

 2. A

 3. C

 4. B

Question ID : 2055231785

Status : Answered

Chosen Option : 4

Q.24 Union Government's School Nursery Yojana is about

- A. Creating environmental awareness in young minds.
- B. Streamlining admissions in nursery schools.
- C. Bringing nursery schools under regulations.
- D. Creating awareness about safety of children.

Ans  1. A

 2. C

 3. B

 4. D

Question ID : 2055231766

Status : Answered

Chosen Option : 4

- A. Mother
- B. Daughter
- C. Cousin
- D. Niece

Ans  1. B

 2. D

 3. A

 4. C

Question ID : 2055231836

Status : Answered

Chosen Option : 4

Q.26 Chief Election Commissioner of India can be removed from the office by

- A. Both houses of Parliament
- B. Union council of Ministers
- C. President of India
- D. Chief Justice of India

Ans  1. C

 2. B

 3. A

 4. D

Question ID : 2055231767

Status : Answered

Chosen Option : 4

Q.27 $\cos^2 90^\circ + \operatorname{cosec}^2 90^\circ - \cot^2 45^\circ = ?$

- A. 2
- B. 1
- C. 1/2
- D. $\sqrt{3}/2$

Ans  1. D

Question ID : 2055231817

Status : Answered

Chosen Option : 2

 4. C

Q.28 As per Census of India 2011, the population density was about

- A. 382 people per sq.km
- B. 353 people per sq.km
- C. 402 people per sq.km
- D. 428 people per sq.km

Ans  1. B

 2. C

 3. D

 4. A

Question ID : **2055231756**

Status : **Answered**

Chosen Option : **1**

Q.29 The difference between the ages of two sisters is 4 years when father's age is 54. Father is elder by 2 years to mother. Younger sister's age is half of mother's age. Find the age of elder sister.

- A. 26
- B. 27
- C. 29
- D. 30

Ans  1. D

 2. A

 3. B

 4. C

Question ID : **2055231793**

Status : **Answered**

Chosen Option : **2**

A. 2

B. 3

C. 4

D. 5

Ans  1. B

 2. C

 3. D

 4. A

Question ID : 2055231794

Status : **Answered**

Chosen Option : 3

Q.31 Syed Modi International Grand Prix Gold Championship is held every year at _____.

A. Chandigarh

B. Lucknow

C. Delhi

D. Hyderabad

Ans  1. B

 2. A

 3. D

 4. C


Question ID : 2055231762

Status : **Answered**

Chosen Option : 3

Q.32 Name the first woman to head a paramilitary force.

- A. Divya Ajith
- B. Archana Ramasundaram
- C. Punita Arora
- D. Ashwini Pawar

Ans  1. D
 2. A
 3. C
 4. B

Question ID : 2055231758

Status : **Answered**

Chosen Option : 3

Q.33 Who was known as Badshah Khan?

- A. Mohammed Ali Jinnah
- B. Abul Kalam Azad
- C. Khan Abdul Ghaffar Khan
- D. Khan Abdul Wali Khan

Ans  1. B
 2. C
 3. A
 4. D

Question ID : 2055231761

Status : **Answered**

Chosen Option : 2

Comprehension:

downloaded from www.wtaps.com

The following table presents the rainfall (in mm) of five states from June to September in a year.

	June	July	August	September
JK	1100	1100	1000	1200
HP	1100	1100	1000	1300
WB	1400	1300	1200	1000
GA	1000	1300	1500	1700
TN	1200	1050	1000	1100

Consider the information and answer questions based on it.

SubQuestion No : 34

Q.3
4 Which state has the lowest average rainfall?

- A. JK
- B. HP
- C. WB
- D. TN

Ans  1. C

 2. D

 3. A

 4. B

Question ID : 2055231850

Status : Answered

Chosen Option : 4

Comprehension:

downloaded from www.wtaps.com

The following table shows the rainfall (in mm) of five states from June to September in a year.

	June	July	August	September
JK	1100	1100	1000	1200
HP	1100	1100	1000	1300
WB	1400	1300	1200	1000
GA	1000	1300	1500	1700
TN	1200	1050	1000	1100

Consider the information and answer questions based on it.

SubQuestion No : 35

Q.3 Which state shows a gradual increase in its rainfall from June to September?
5

- A. HP
- B. WB
- C. GA
- D. TN

Ans  1. C

 2. B

 3. D

 4. A

Question ID : 2055231849

Status : Answered

Chosen Option : 4

Comprehension:

downloaded from www.wtapscrepnit.com

The following table shows the rainfall (in mm) of five states from June to September in a year.

	June	July	August	September
JK	1100	1100	1000	1200
HP	1100	1100	1000	1300
WB	1400	1300	1200	1000
GA	1000	1300	1500	1700
TN	1200	1050	1000	1100

Consider the information and answer questions based on it.

SubQuestion No : 36

Q.3
6 Which month received the lowest rainfall in the year?

- A. June
- B. July
- C. August
- D. September

Ans  1. C

 2. B

 3. D

 4. A

Question ID : 2055231851

Status : Answered

Chosen Option : 3

Q.37 ஒரு இரவு இலக்க எண்ணுக்கும் மற்ற மூன்று இலக்கங்களிலும் வரும் எண்ணுக்கும் இடையில் உள்ள வித்தியாசம் 54. அந்த எண்ணின் மூன்று இலக்கங்களுக்கு இடையில் உள்ள வித்தியாசம் என்ன?

- A. 6
- B. 7
- C. 8
- D. 9

Ans



1. B



2. A



3. C



4. D

Question ID : 2055231811

Status : Answered

Chosen Option : 2

Q.38 During morning walk, a man covers a distance of 3 km, 4 km, 3.5 km, 5 km and 4.5 km from Monday to Friday, respectively. How much distance should he cover on two more days, so that his average per week becomes 4 km per day?

- A. 4
- B. 8
- C. 5
- D. 6

Ans



1. A



2. C



3. B



4. D

Question ID : 2055231792

Status : Answered

Chosen Option : 3

Q.39 Find the HCF & LCM of 16, 24.

- A. 8, 48
- B. 4, 12
- C. 2, 24
- D. 4, 48

Ans



1. A

Question ID : 2055231799

Status : Answered

Chosen Option : 3

 3. B

 4. C

Q.40 Saffron is produced in a large scale in

A. Himachal Pradesh

B. Gujarat

C. Jammu and Kashmir

D. Kerala

Ans  1. C

 2. A

 3. B

 4. D

Question ID : 2055231755

Status : Answered

Chosen Option : 1

Q.41 A man purchased a cycle for Rs. 3,000/- and agreed to pay 12% on the amount as interest. He repaid principal and interest in 12 equal monthly installments. Find the amount of each installment.

A. Rs. 260

B. Rs. 240

C. Rs. 280

D. Rs. 300

Ans  1. B

 2. C

 3. D

 4. A

Question ID : 2055231806

Status : Answered

Chosen Option : 1

downloaded from www.wkpsrvan.com

Q.42 The political system in Afghanistan is known as

- A. Islamic State of Afghanistan
- B. Islamic Republic of Afghanistan
- C. Islamic Emirate of Afghanistan
- D. Islamic Government of Afghanistan

Ans  1. B
 2. C
 3. D
 4. A

Question ID : 2055231757

Status : **Answered**

Chosen Option : 3

Q.43 If 'are you sam' = 'ri ai ki', 'all hate you' = 'vi li ri' and 'all are fake' = 'mi ai li' then which represents 'hate'?

- A. ri
- B. li
- C. vi
- D. ai

Ans  1. C
 2. D
 3. A
 4. B

Question ID : 2055231824

Status : **Answered**

Chosen Option : 2

Q.44 Pointing to K, M said that she was the daughter of the only son of his grandfather. How M is related to K?

- A. Mother
- B. Maternal aunt
- C. Daughter
- D. Sister

Ans  1. B
 2. A

Question ID : 2055231835

Status : **Answered**

Chosen Option : 2

 4. C

Q.45 Find the mean value of 2, 3, 3, 4, 6, 7

A. 4.17

B. 4.15

C. 4.13

D. 4.70

Ans  1. C

 2. B

 3. D

 4. A

Question ID : 2055231820

Status : Answered

Chosen Option : 1

Q.46 Who won majority of the men's singles tennis grand slam tournaments in 2015?

A. Andy Murray

B. Novak Djokovic

C. Roger Federer

D. Stanislas Wawrinka

Ans  1. C

 2. D

 3. A

 4. B

Question ID : 2055231769

Status : Answered

Chosen Option : 1

க. ஒரு தொகையை ஒரு குறிப்பிட்ட விதத்தை வட்டிக்கு / வருடத்திற்கு கடனாக பெற்றுக்கொள்ளும்படித்தார். ஆனால் கடன் கொடுத்தவர் வட்டி வதத்தை 5% அதிகரித்தார். அது ரூபாய்.120 ஆக ஆனது. அசல் தொகையை கண்டுபிடி?

- A. ரூபாய்.4,000
- B. ரூபாய்.3,500
- C. ரூபாய்.4,200
- D. ரூபாய்.5,000

Ans  1. D

 2. A

 3. B

 4. C

Question ID : 2055231807

Status : Answered

Chosen Option : 3

Q.48 If CABINET = EIACBTN, then COMPUTE = _____.

- A. TPOMECU
- B. TPOCMEU
- C. PTOCMEU
- D. CMUEOPT

Ans  1. B

 2. A

 3. C

 4. D

Question ID : 2055231825

Status : Answered

Chosen Option : 1

Q.49 The Constituent Assembly adopted Indian national flag on

- A. 22nd July 1947
- B. 22nd August 1947
- C. 22nd January 1948
- D. 22nd October 1947

Question ID : 2055231768

Status : Answered

Chosen Option : 2

Ans  1. D

 2. B

 3. C

 4. A

Q.50 When milk becomes sour, _____ is produced.

A. Lactose

B. Lactic acid

C. Salicylic acid

D. Linoleic acid

Ans  1. A

 2. D

 3. B

 4. C

Question ID : 2055231775

Status : Answered

Chosen Option : 3

Q.51 A shop keeper purchased 10 kg of rice and 20 kg of sugar at Rs. 75 and Rs. 85 per kg respectively. On selling, he gained 20% on rice and 10% on sugar. What was the total sale price?

A. Rs. 2,695

B. Rs. 2,770

C. Rs. 2,800

D. Rs. 2,750

Ans  1. C

 2. A

 3. B



 4. D

Question ID : 2055231808

Status : Answered

Chosen Option : 4

- A. Female mosquito bite
- B. Male mosquito bite
- C. Water
- D. Air

Ans  1. C
 2. D
 3. B
 4. A

Question ID : 2055231782

Status : Answered




Chosen Option : 4

Q.53 Read the given statements carefully and answer the question.

The main reasons for vehicles crawling on city roads during peak hours are increasing number of private vehicles and double parking which is a very common sight. A survey reveals that vehicles move on an average at 20 kmph during peak hours.

Which of the following is true according to the given statement?

- A. Vehicles move at 20 kmph during 5 pm to 9 pm.
- B. Double parking is not a violation of traffic rules in the city.
- C. The number of private vehicles have gone up.
- D. The number of Government vehicles remain the same.

Ans  1. A
 2. D
 3. C
 4. B

Question ID : 2055231852

Status : Answered

Chosen Option : 2

downloaded from the website www.vijaynagar.com

Q.54 Which of the following is in ascending order?

- A. 0.65, 0.76, 0.67, 0.86
- B. 0.65, 0.86, 0.67, 0.76
- C. 0.65, 0.67, 0.76, 0.86
- D. 0.67, 0.65, 0.76, 0.86

Ans  1. A
 2. C
 3. D
 4. B

Question ID : 2055231796

Status : **Answered**

Chosen Option : 2

Q.55 Which one does not belong to the group?

- A. Zee
- B. Screen
- C. Colors
- D. Sony

Ans  1. C
 2. A
 3. B
 4. D

Question ID : 2055231753

Status : **Answered**

Chosen Option : 2

downloaded from: www.kpscvaani.com

Q.56 A path of 2.5 m width surrounds a rectangular garden of length 10 m and breadth 8 m. Area of the garden, inclusive of the path is

- A. 130.25 sq.m
- B. 131.25 sq.m
- C. 195.00 sq.m
- D. 162.50 sq.m

Ans  1. C

 2. B

 3. D

 4. A

Question ID : 2055231814

Status : Answered

Chosen Option : 3

Q.57 Find the similarity in the following:

Leopard, Tiger, Jaguar, Lion

- A. All of them are found in India.
- B. All of them belong to the cat family.
- C. All of their young ones are called kittens.
- D. There is no similarity.

Ans  1. D

 2. A

 3. C

 4. B





Question ID : 2055231833

Status : Answered

Chosen Option : 1

Q.58 The end of British rule in India came in the year

- A. 1946
- B. 1947
- C. 1948
- D. 1950

Ans  1. C
 2. B
 3. A
 4. D


Question ID : 2055231760

Status : Answered

Chosen Option : 2

Q.59 A trader bought 10 kg of tea at Rs.400 per kg. He sold half the quantity at 20% loss and remaining at 10% profit. What was his net profit or loss in percentage?

- A. 5% loss
- B. 5% gain
- C. 10% loss
- D. 10% gain

Ans  1. B
 2. A
 3. C
 4. D

Question ID : 2055231809

Status : Answered

Chosen Option : 2

Q.60 P யின் தந்தை Q வின் மருமகனாவார். Q வுக்கு ஒரே ஒரு குழந்தை உண்டு மற்றும் R என்பவர் Q வின் பேத்தியாவார். P க்கு R என்ன உறவு?

- A. சகோதரி
- B. பேத்தி
- C. மகள்
- D. தாய்

Ans  1. A

Question ID : 2055231834

Status : Answered

Chosen Option : 1

 3. B

 4. C

Q.61 நெஃப்ராலஜி (Nephrology) என்பது _____ உடன் தொடர்புடையது.

A. ஈரல்

B. நுரையீரல்கள்

C. சிறுநீரகம்

D. முன் சிறுகுடல்

Ans  1. C

 2. D

 3. B

 4. A

Question ID : 2055231783

Status : Answered

Chosen Option : 4

Q.62 Who was the first chairman of ISRO?

A. Kasturirangan

B. Vikram Sarabhai

C. Homi K. Bhabha

D. C. V. Raman

Ans  1. C

 2. B

 3. A

 4. D

Question ID : 2055231788

Status : Answered

Chosen Option : 2

Q.63 Find the odd statement out in relation to firewall.

- A. Firewall can be a software.
- B. Firewall can be a hardware.
- C. Firewall can be a combination of software & hardware.
- D. Firewall protects computer from fire.

Ans  1. A

 2. C

 3. B

 4. D

Question ID : 2055231790

Status : Answered

Chosen Option : 4

Q.64 What will be the cost of leveling a circular ground of diameter 28 m, if the charges are Rs. 125 per sq.m? ($\pi = 22/7$).

- A. Rs. 76,000
- B. Rs. 76,400
- C. Rs. 76,800
- D. Rs. 77,000

Ans  1. B

 2. A

 3. C

 4. D

Question ID : 2055231815

Status : Answered

Chosen Option : 2

Q.65 The popular Yankee Stadium in USA is located at

- A. Boston
- B. New York
- C. Las Vegas
- D. Washington

Question ID : 2055231764

Status : Answered

Chosen Option : 3

Ans  1. D

 2. A

 3. C

 4. B

Q.66 $\operatorname{cosec}(90^\circ - \theta) = ?$

A. $\tan \theta$

B. $\cot \theta$

C. $\sec \theta$

D. $\cos \theta$

Ans  1. D

 2. A

 3. C

 4. B

Question ID : 2055231818

Status : Answered

Chosen Option : 3

Q.67 An article was sold for Rs.2100 at a profit of 25%. What is its cost price?

A. Rs. 1,620

CP = $[100 / (100 + \text{Gain}\%)] * \text{SP}$

B. Rs. 1,640

CP = $[100 / (100 + 25)] * 2100$

C. Rs. 1,660

CP = 1680

D. Rs. 1,680

Ans  1. D

 2. C

 3. B

 4. A

Question ID : 2055231810

Status : Answered

Chosen Option : 2

In a certain code, 327 means 'don't cut tree', 635 means 'plant one tree', 138 means 'tree gives shade' and 4953 means 'we must plant tree'. Which digit represents 'shade'?

- A. 1
- B. 4
- C. 8
- D. cannot be determined

Ans  1. B
 2. C
 3. D
 4. A

Question ID : 2055231822


Status : Answered

Chosen Option : 2

Q.69 Read the given statements carefully and answer the question.

Spending money should be based on logical decision and not compulsive or impulsive behavior. One should not fall prey to possible hidden agenda of the sellers who come out with 'sale', 'free offer' etc. Price is what you pay, value is what you should get.

- A. When you pay for something, look for value.
- B. Any discounted sale has a hidden agenda against the consumer.
- C. People do compulsive or impulsive and not logical spending.
- D. Sellers are cheating the public.

Ans  1. D
 2. C
 3. A
 4. B

Question ID : 2055231854

Status : Answered

Chosen Option : 2

Q.70 An electric motor converts

- A. Mechanical energy into electrical energy.
- B. Thermal energy into electrical energy.
- C. Electrical energy into mechanical energy.
- D. Radiant energy into electrical energy.

Question ID : 2055231774

Status : Answered

Chosen Option : 3

 3. C

 4. A

Q.71 When the car takes a bend, the force that pushes us to the outside of the curve is the

- A. Centripetal Force
- B. Centrifugal Force
- C. Frictional Force
- D. Tension Force

Ans  1. D

 2. A

 3. B

 4. C

Question ID : **2055231773**

Status : **Answered**

Chosen Option : **2**

Q.72 The Prime Minister is the ex-officio President of

- A. CLRI
- B. CSIR
- C. ISRO
- D. DRDO

Ans  1. B

 2. C

 3. D

 4. A

Question ID : **2055231780**

Status : **Answered**

Chosen Option : **3**

Q.73 The name of the newest Antarctica research base commissioned in 2015 is

- A. Dakshin Gangotri
- B. Maitri
- C. Bharati
- D. Lotus

Ans  1. D

 2. B

 3. C

 4. A

Question ID : 2055231787

Status : Answered

Chosen Option : 3

Q.74 A car covers the first 30 km at a speed of 60 kmph and the next 20 km at 80 kmph. Find the average speed.

- A. 65.67 kmph
- B. 65.33 kmph
- C. 66.33 kmph
- D. 66.67 kmph

Ans  1. D

 2. C

 3. B

 4. A

Question ID : 2055231805

Status : Answered

Chosen Option : 2

Q.75 Indian sports person Gagan Narang is associated with

- A. Archery
- B. Air rifle shooting
- C. Wrestling
- D. Badminton

Ans  1. A

Question ID : 2055231763

Status : Answered

Chosen Option : 1

 3. B

 4. C

Q.76 Which number will fit in ‘?’ place in the following series?

12, 23, 45, 89, ?

A. 175

B. 176

C. 177

D. 178

Ans  1. D

 2. C

 3. B

 4. A

Question ID : 2055231829

Status : Answered

Chosen Option : 4

Q.77 Microsoft Corporation was founded in

A. 1979

B. 1981

C. 1975

D. 1965

Ans  1. C

 2. B

Question ID : 2055231784

Status : Answered

Chosen Option : 2

Q.78 If F = 6, THE = 33 then WOMAN =?

A. 64

B. 65

C. 66

D. 67

Ans  1. D

 2. C

 3. A

 4. B

Question ID : 2055231823

Status : Answered

Chosen Option : 2

Q.79 If the mathematical operators, '×' means '+', '÷' means '×', '+' means '-', and '-' means '÷', then
 $22 + 36 - 12 \times 6 \div 4 = ?$

A. -21 $= 22 - (36 \div 12) + (6 \times 4)$

B. 43 $= 22 - 3 + 24$

C. 68 $= 43$

D. 53

Ans  1. C

 2. A

 3. B

 4. D

Question ID : 2055231826

Status : Answered

Chosen Option : 3

Question ID : 2055231778

Status : **Answered**

Chosen Option : 1

- A. Adrenal
- B. Liver
- C. Pituitary
- D. Gall bladder

Ans  1. B
 2. D
 3. A
 4. C

Q.81 Who was conferred the Arjuna Award for wrestling in 2015?

Question ID : 2055231770

Status : **Answered**

Chosen Option : 4

- A. Babita Kumari
- B. Abhilasha Shashikant
- C. Yumnam Sanathoi Devi
- D. M. R. Poovamma

Ans  1. C
 2. D
 3. A
 4. B

downloaded from: www.kpsevaan.com

Q.82 Every set in the dotted decimal format of IP address is called

- A. Subnet
- B. Octet
- C. Subset
- D. IP set

Ans  1. B

 2. C

 3. A

 4. D

Question ID : 2055231786

Status : Answered

Chosen Option : 3

Q.83 If $x + y = 19$ and $x - y = 7$, then $xy = ?$

- A. 13
- B. 48
- C. 78
- D. 72

Ans  1. D

 2. A

 3. C

 4. B

Question ID : 2055231812

Status : Answered

Chosen Option : 4

Q.84 A tap can fill a tank in 20 minutes. If a leakage is capable of emptying the tank in 60 minutes, the tank will be filled in

- A. 1 hour
- B. 45 minutes
- C. 30 minutes
- D. 50 minutes

Question ID : 2055231802

Status : Answered

Chosen Option : 2

Ans  1. D

 2. B

 3. C

 4. A

Q.85 The arithmetic mean of the marks scored by students of a class is 58. 20% of them secured a mean score of 60. The mean score of another 30% of the students was 40. The mean score of the remaining students is

- A. 65
- B. 66
- C. 68
- D. 70

Ans  1. B

 2. D

 3. A

 4. C

Question ID : **2055231819**

Status : **Answered**

Chosen Option : **2**

Q.86 Parliament House in Delhi was constructed during

- A. 1895 - 1900
- B. 1901 - 1909
- C. 1921 – 1927
- D. 1931 – 1935

Ans  1. A

 2. D

 3. B

 4. C

Question ID : **2055231772**

Status : **Answered**

Chosen Option : **3**

Question ID : 2055231777

Status : **Answered**

Chosen Option : 1

- A. Deficiency of platelets.
- B. Deficiency of RBC.
- C. Deficiency of WBC.
- D. Deficiency of oxidants.

Ans  1. B

 2. D

 3. A

 4. C

Comprehension:

Consider the following information and answer the questions based on it.

Out of 50 kids in a colony, 10 like only basketball, 25 like only football, 10 like both volleyball and football and 5 like only volleyball.

SubQuestion No : 88

Q.8
8 How many kids do not like volleyball?

- A. 15
- B. 25
- C. 35
- D. 45

Ans  1. D

 2. A

Question ID : 2055231845

Status : **Answered**

Chosen Option : 3

 4. C

Comprehension:

Consider the following information and answer the questions based on it.

Out of 50 kids in a colony, 10 like only basketball, 25 like only football, 10 like both volleyball and football and 5 like only volleyball.

SubQuestion No : 89

Q.8 The ratio of kids who like football to those who like only basketball is
9

- A. $5/2$
- B. $7/2$
- C. 4
- D. 5

Ans  1. C

 2. A

 3. D

 4. B

Question ID : 2055231846

Status : Answered

Chosen Option : 2

Comprehension:





Consider the following information and answer the questions based on it.

Out of 50 kids in a colony, 10 like only basketball, 25 like only football, 10 like both volleyball and football and 5 like only volleyball.

SubQuestion No : 90

Q.90 How many kids like every sport?

- A. 50
- B. 40
- C. 35
- D. 25

Ans  1. C
 2. A
 3. D
 4. B


Question ID : 2055231847

Status : **Answered**

Chosen Option : 2

Q.91 Four pairs of words are given. Find the odd one out.

- A. White : Snow
- B. Red : Blood
- C. Brown : Sky
- D. Green : Grass

Ans  1. A
 2. C
 3. B
 4. D

Question ID : 2055231832

Status : **Answered**

Chosen Option : 2

downloaded from: www.kpsevaani.com

Q.92 The recent trial run of 'odd-even' traffic scheme for Delhi was based on

- A. odd-even calendar months
- B. odd-even calendar dates
- C. vehicle registration numbers
- D. odd-even hours during 8 am to 8 pm

Ans  1. D

 2. A

 3. C

 4. B

Question ID : 2055231754

Status : **Answered**

Chosen Option : 1

Q.93 Read the given statements carefully and answer the question.

Taxes on eating out have been increased. Eating out is not an act of the luxurious. Over-worked and time-pressed poor also need to eat out.

- A. The poor enjoy the luxury of eating out.
- B. Eating out is luxury for the poor.
- C. Eating out is need-based for the poor also.
- D. Tax on eating out must be reduced.

Ans  1. B

 2. A

 3. C

 4. D

Question ID : 2055231853

Status : **Answered**

Chosen Option : 2

Q.94 The ratio of marks obtained by a student in 3 subjects was 1:2:3. The school decided to allow grace marks of 5% for each subject. Find the student's new ratio.

- A. 1:2:3
- B. 2:3:4
- C. 2:3:1
- D. 3:2:1

Ans  1. A

 2. D

Question ID : 2055231801

Status : **Answered**

Chosen Option : 2

 4. B

Q.95 A bus runs at 50 kmph. If the speed is increased by 10 kmph, it will cover 20 km more in the same time. Find the actual distance covered?

- A. 100 km
- B. 150 km
- C. 200 km
- D. 250 km

Ans  1. B

 2. C

 3. A

 4. D

Question ID : **2055231804**

Status : **Answered**

Chosen Option : **1**

Q.96 The Hornbill festival is celebrated in

- A. Arunachal Pradesh
- B. Nagaland
- C. Odisha
- D. West Bengal

Ans  1. A

 2. B

 3. D

 4. C

Question ID : **2055231759**

Status : **Answered**

Chosen Option : **2**

Q.97 Red from: sw of wikipedia. Find the odd one out.

- A. Rhombus : Four-sided polygon
- B. Nonagon : Seven-sided polygon
- C. Octagon : Eight-sided polygon
- D. Hexagon : Six-sided polygon

Ans  1. B

 2. A

 3. D

 4. C

Question ID : 2055231830

Status : Answered

Chosen Option : 2

Q.98 Find the 4th proportional to 9, 17 and 27.

- A. 57
- B. 48
- C. 51
- D. 53

Ans  1. D

 2. B

 3. A

 4. C

Question ID : 2055231800

Status : Answered

Chosen Option : 4

Q.99 Union Government Budget deficit for a particular financial year represents

- A. Total amount of revenue receipts.
- B. Total amount of capital receipts.
- C. The amount of money that the Government has to borrow.
- D. Total amount of estimated Government expenditure.

Ans  1. D

 2. A

 3. C

 4. B

Question ID : 2055231752

Status : **Answered**

Chosen Option : 3

Q.10 Which aircraft carrier was formally inducted into the Indian Navy by Prime Minister Narendra Modi in the year 2014?

0

- A. INS Vikrant
- B. INS Vikramaditya
- C. INS Viraat
- D. INS Chakra

Ans  1. D

 2. B

 3. A

 4. C

Question ID : 2055231779

Status : **Answered**

Chosen Option : 3